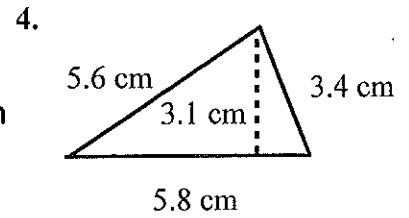
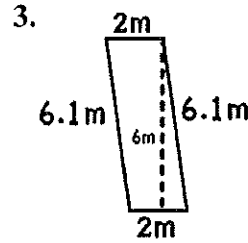
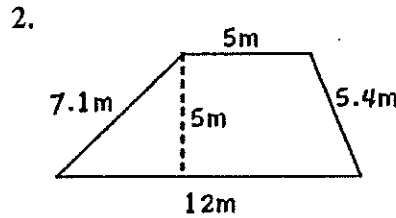
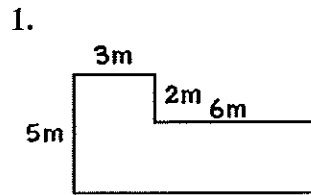


Find the Area and Perimeter of the polygons below. Show all your work!



Add, subtract, multiply and divide. Show all your work! Simplify your answers! Do not use a calculator.

5.  $2\frac{1}{2} + 3\frac{2}{7} =$

6.  $8.7 \times 7 =$

7.  $7.1 - 2.813 =$

8.  $16 \div 2\frac{4}{6} =$

9. At the mall  $\frac{5}{8}$  of the the people donated to the charity. If there were 3,648 people at the mall, how many made a donation? Show your work. You may use a calculator.

10. Tyree made \$944 for working  $19\frac{2}{3}$  hours. How much did he earn per hour? Show your work. You may use a calculator.

11. Complete the following chart. You may use a calculator.

12.  $|-9.2| =$  \_\_\_\_\_

13.  $|21| =$  \_\_\_\_\_

Prob	RATIO	FRACTION	DECIMAL	PERCENT
A				102%
B				5%
C				33%
D				5.3%
E		$\frac{32}{32}$		
F		$\frac{8}{27}$		
G		$2\frac{3}{11}$		