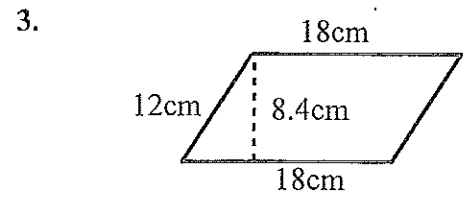
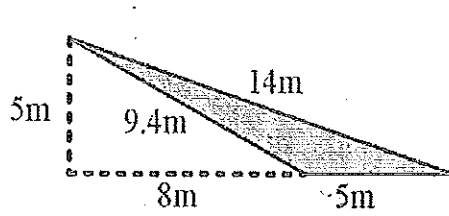
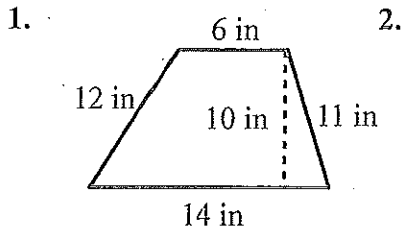


Find the Area and Perimeter of the polygons below. Show all your work! You may use a calculator.



Add, subtract, multiply and divide. Show all your work! Simplify your answers! Do not use a calculator.

4. $5.83 + 3.9 + 4 =$

5. $1.7 \times 9 =$

6. $7 - 3\frac{11}{12} =$

7. $31.45 \div .5 =$

Simplify the following problems down to one value. Do not use a calculator.

8. $12 - 20 =$

9. $|38| =$

10. $-1 - 25 - 4 =$

11. $32 - 8 + 6 =$

12. $-61 + 31 =$

13. $|-94| =$

14. $-8 + 15 - 7 =$

15. $-28 - 12 =$

16. Complete the following chart. You may use a calculator.

Prob	RATIO	FRACTION	DECIMAL	PERCENT
A				101%
B				7%
C				83%
D				96.7%
E		$\frac{19}{19}$		
F		$\frac{7}{24}$		
G		$1\frac{6}{11}$		