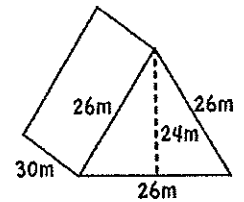
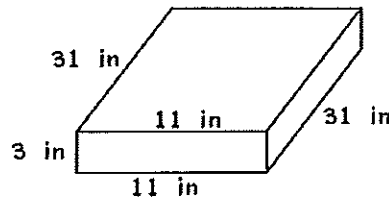
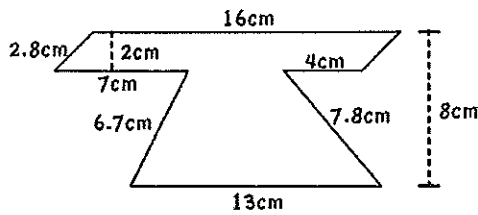


1. Find the area and the perimeter. **Show your work! You may use a calc.** 2. Find the surface area and volume. **Show your work! You may use a calc.** 3. Find the volume. **Show your work! You may use a calc.**

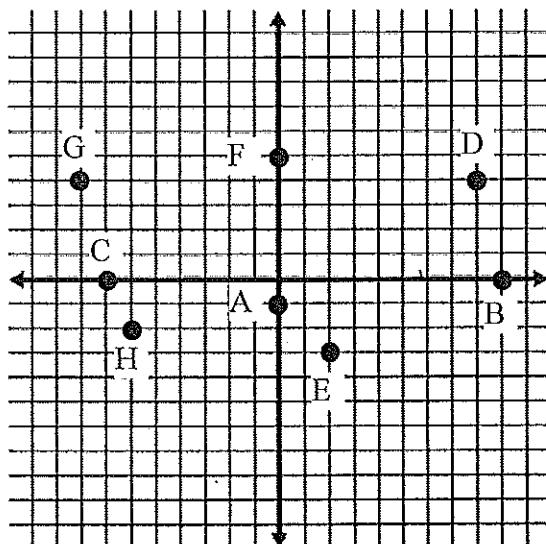


Simplify the following problems down to one value. Do not use a calculator.

4. $-32 - 7 =$ 5. $|50| =$ 6. $-3 - 62 - 6 =$ 7. $76 - 9 + 3 =$
 8. $-84 + 20 =$ 9. $|-3.4| =$ 10. $-11 + 19 - 5 =$ 11. $45 - 70 =$

What's the distance between the following points on a coordinate graph?

12. $(-2, 8)$ and $(-2, 35)$ 13. $(7, 28)$ and $(-23, 28)$ 14. $(14, -16)$ and $(14, -24)$



15. Write the ordered pair.

- A = _____ E = _____
 B = _____ F = _____
 C = _____ G = _____
 D = _____ H = _____

Solve using a calculator.

16. $\frac{22.4}{\square} = \frac{15}{45}$

17. $\frac{\square}{2\frac{4}{5}} = \frac{7}{8} \div 4\frac{1}{6}$